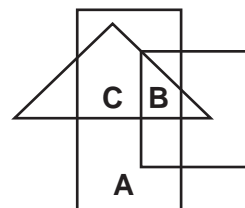




MINUTE 13

1. Round each number to the nearest hundred.
 $124 =$ $2,311 =$ $48 =$

For Problems 2–3, use the diagram to the right.



2. What letter is inside the triangle and the rectangle that is not in the square? _____
3. Which letter is inside of all three shapes? _____
4. Circle the fraction that is NOT in its simplest form.

$$\frac{1}{4}$$

$$\frac{2}{5}$$

$$\frac{3}{8}$$

$$\frac{2}{6}$$

For Problems 5–6, use the chart to the right.

4th Grade Classes		
	Boys	Girls
Room 1	12	13
Room 2	15	11

5. According to the chart, what fraction of the total number of students in Room 1 are boys? _____
6. How many boys are in Rooms 1 and 2? _____
7. $3 \cdot 4 + 2 \cdot 2 = 16$ Circle: True or False
8. A car salesman says he will give out a prize one day of next week to anyone who test drives a car. What is the probability that he will give out this prize on Thursday? _____

9. $\frac{1}{2} \times \frac{1}{3} =$

$$\frac{1}{3} \times \frac{1}{4} =$$

$$\frac{1}{5} \times \frac{1}{6} =$$

10.
$$\begin{array}{r} 46 \\ -16 \\ \hline \end{array}$$


$$\begin{array}{r} 79 \\ -16 \\ \hline \end{array}$$

$$\begin{array}{r} 88 \\ -16 \\ \hline \end{array}$$

NAME: _____

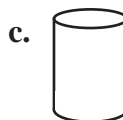
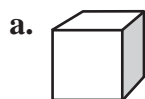


MINUTE 14



1. In the number 1,846, the ____ is in the tens place and the ____ is in the hundreds place.

2. Which of these shapes best represents a cube?



3. Circle the fraction that is NOT in its simplest form.

$$\frac{5}{11}$$

$$\frac{5}{15}$$

$$\frac{5}{12}$$

$$\frac{5}{18}$$

4. If $\frac{2}{3} = \frac{a}{15}$, then $a =$ _____.

5. + 11 = 20

6. These four cubes were placed in a bag. What is the probability that the dark one would be pulled out of the bag first? _____



For Problems 7–8, use the bar graph to the right.

7. Which of the following statements is (are) true about the graph?

a. $A + B = 50$ b. C is half of B c. B is more than A

8. $A + B + C$ is closest to: a. 50 b. 100 c. 200

9. Change to decimal form.

$$2\frac{1}{2} =$$

$$3\frac{1}{4} =$$

$$20\frac{1}{2} =$$

10. $\frac{20}{4} =$

$$\frac{30}{5} =$$

$$\frac{40}{8} =$$

